

**INDIAN SCHOOL MUSCAT
PRIMARY SECTION**

SUBJECT: MATHEMATICS

TERM II

NAME :

TOPIC: TIME

WORKSHEET NO. 4





STD IV:

ROLL NO :





TEACHER'S SIGNATURE:

DATE :

1. Draw hands in the given clocks to show the time.

 6:40	 8:25	 7:55	 10:10
---	---	--	--

2. What is the time?

 _____	 _____	 _____	 _____
---	---	--	---

3. Convert the following.

<p>a. 2 hours 40 minutes into <u>minutes</u></p>	<p>b. 280 minutes into <u>hours and minutes</u></p>
<p>c. 30 minutes into <u>seconds</u></p>	<p>d. 623 seconds into <u>minutes and seconds</u></p>

e. **5 years** into days.

f. **360 days** into weeks and days

g. **7 months 20 days** into days

h. **75 months** into years and months

4. Add the following.

a. **3 hrs 50 min** and **7 hrs 15 min**

b. **10 min 30 sec** and **5 min 25 sec**

5. Subtract the following.

a. **20 min 15 sec** from **40 min 20 sec**

b. **6 hrs 35 min** from **13 hrs 20 min**

6. Find the time intervals between

a. 6: 20 a.m. and 10: 30 a.m.	b. 11:40 a.m. and 3:50 p.m.
-------------------------------	-----------------------------


7. Change to 24 hour clock time.

a. 7: 30 p.m.

8. Change to 12 hour clock time.

b. 2100 hours.

8. Give the measure of the angle made by the hands of the clock.



--